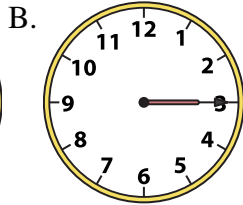
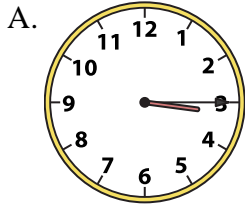




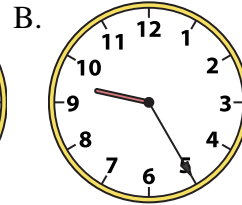
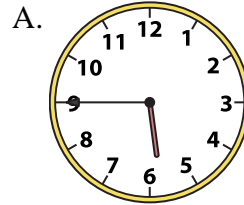
Determine which clock accurately shows the time.

**Answers**


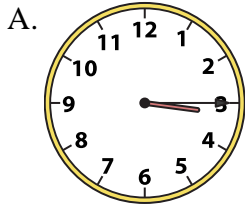
1) 3:15



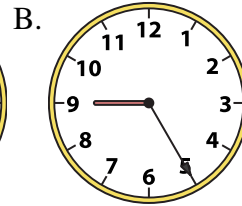
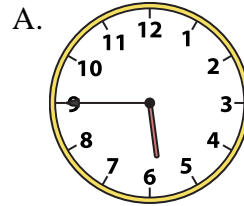
2) 5:45




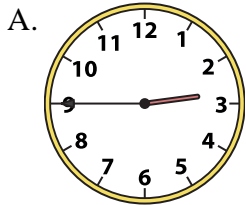
3) 3:15



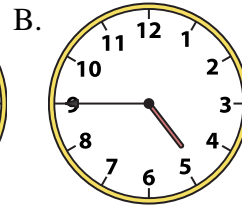
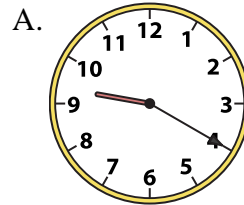
4) 5:45



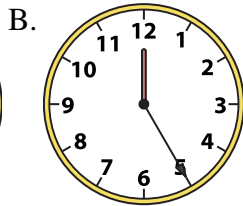
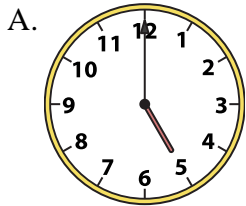
5) 2:45



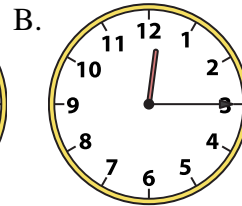
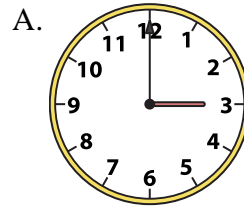
6) 4:45



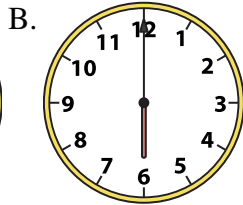
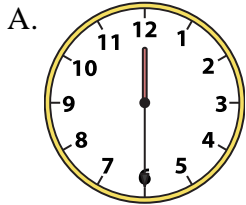
7) 5:00



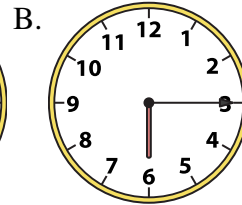
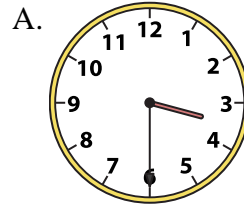
8) 12:15




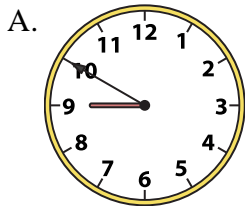
9) 6:00



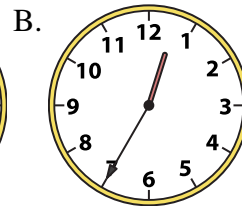
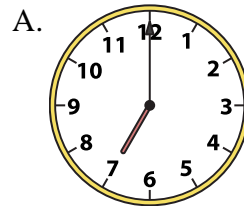
10) 3:30




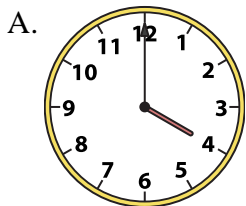
11) 10:45



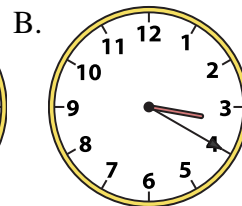
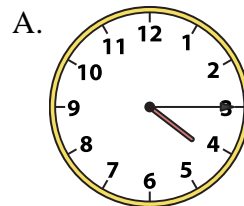
12) 7:00



13) 4:00



14) 4:15

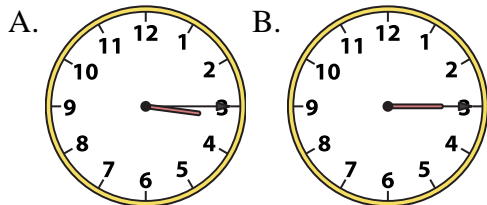


1. \_\_\_\_\_
2. \_\_\_\_\_
3. \_\_\_\_\_
4. \_\_\_\_\_
5. \_\_\_\_\_
6. \_\_\_\_\_
7. \_\_\_\_\_
8. \_\_\_\_\_
9. \_\_\_\_\_
10. \_\_\_\_\_
11. \_\_\_\_\_
12. \_\_\_\_\_
13. \_\_\_\_\_
14. \_\_\_\_\_
15. \_\_\_\_\_
16. \_\_\_\_\_

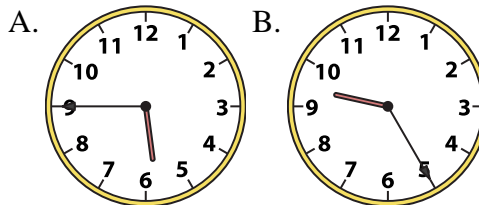


Determine which clock accurately shows the time.

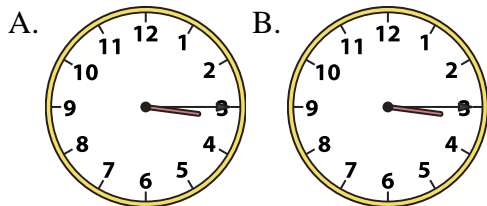
1) 3:15



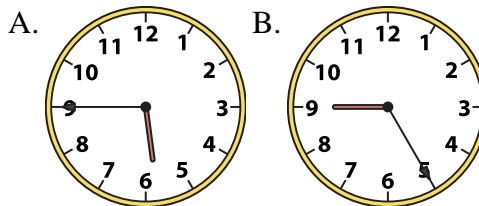
2) 5:45



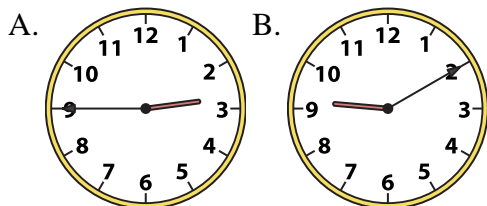
3) 3:15



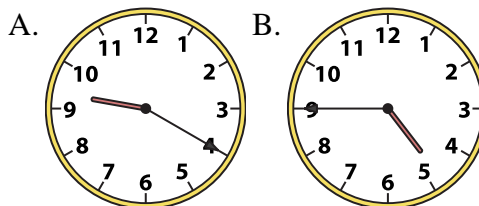
4) 5:45



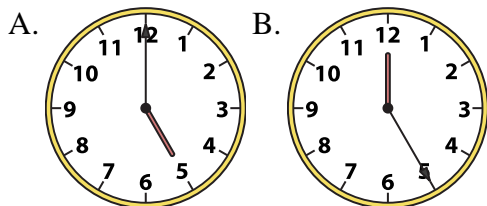
5) 2:45



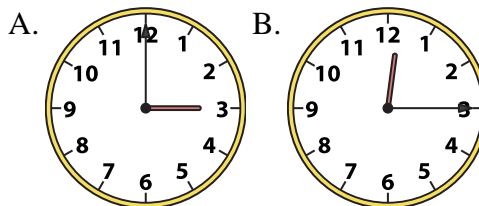
6) 4:45



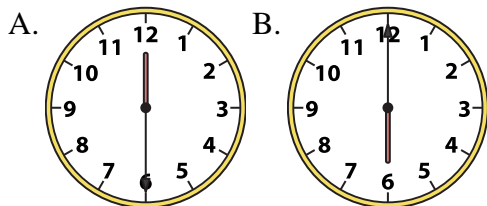
7) 5:00



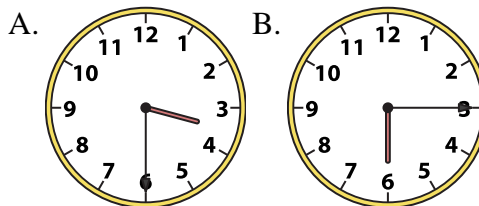
8) 12:15



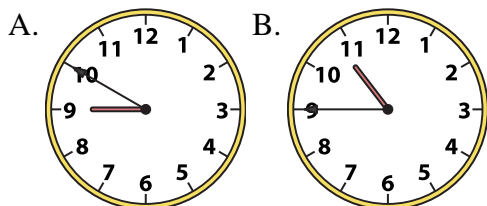
9) 6:00



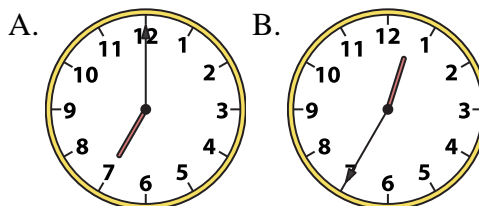
10) 3:30



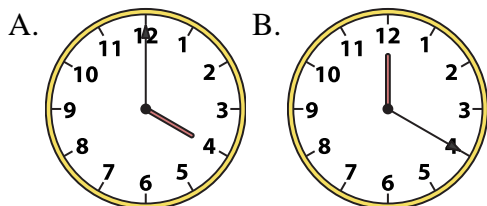
11) 10:45



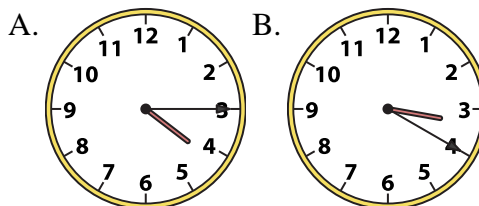
12) 7:00



13) 4:00



14) 4:15



**Answers**

1. **A**

2. **A**

3. **B**

4. **A**

5. **A**

6. **B**

7. **A**

8. **B**

9. **B**

10. **A**

11. **B**

12. **A**

13. **A**

14. **A**

15. **B**

16. **A**